

**CITY UNIVERSITY OF HONG KONG**

---

Course code & title : FB2200 Management Sciences I  
Session : Semester A 1999-2000  
Time allowed : Two hours

---

This paper has *TEN* pages. (Including this page.)

---

*Instructions to students:*

1. This paper consists of 4 questions.
  2. Attempt *ALL FOUR* questions.
  3. All questions carry equal marks.
  4. Start each question on a new page.
  5. A set of formulas and three statistical tables are given in APPENDIX I, II, III and IV respectively.
- 

Materials, aids and instruments permitted to be used during examination:

Portable calculator

---

Special materials other than standard materials (e.g., answer book or supplementary sheets) to be supplied to students.

Nil

---

**Question 1** (25 marks)

- (a) The accompanying table shows the percentage decreases in share values for the twenty-five largest common stock mutual funds in a country on Friday, November 13, 1998.

4.7	10.4	4.0	4.7	7.2
4.4	3.5	3.3	3.8	6.4
3.3	3.6	10.5	4.4	5.4
3.0	4.9	5.2	4.2	3.3
4.1	6.0	5.8	3.9	3.8

- (i) Make a stemplot of the data. (3 marks)
- (ii) Find the mean and standard deviation of the data. (4 marks)
- (iii) Describe the distribution of the data. (6 marks)
- (b) The probability is 0.8 that a person age 70 will be alive at age 75.
- (i) Suppose 10 people age 70 are selected at random. Determine the probability that exactly 8 of them will be alive at age 75. What formula are you using? Why can you use such a formula? (6 marks)
- (ii) Suppose this time 500 people age 70 are selected at random. Determine the probability that between 375 and 425 of them, inclusive, will be alive at age 75. Briefly explain your calculation. (6 marks)

**Question 2** (25 marks)

An economist is interested in the relationship between the disposable income of a family and the amount of money spent monthly on food. For a preliminary study, the economist takes a random sample of eight middle-income families of the same size (father, mother, two children). The results are as follows, where  $x$  denotes disposable income, in thousands of dollars, and  $y$  denotes food expenditure, in hundreds of dollars.

$x$	30	36	27	20	16	24	19	25
$y$	55	60	42	40	33	50	39	43

- (a) Make a scatterplot of the data.  
Can you see any relationship between  $x$  and  $y$ ?  
(5 marks)
- (b) Is there statistically significant evidence that the correlation between  $x$  and  $y$  is positive at the 0.05 level?  
(8 marks)
- (c) Find the regression equation  $\hat{y} = a + bx$  for the data.  
(4 marks)
- (d) What do  $a$  and  $b$  represent in terms of disposable income and monthly food expenditure?  
(4 marks)
- (e) Find the coefficient of determination of the regression and interpret your result.  
(4 marks)

**Question 3** (25 marks)

- (a) The following data represent the number of days absent per year in a population of five employees of a small company :

1      3      5      7      11

Assume sampling is done without replacement.

Select all possible samples of size 2 and set up the sampling distribution of the sample mean  $\bar{x}$ . (12 marks)

- (b) The amount of time students spent in revision prior to a test is normally distributed with unknown mean  $\mu$  and known standard deviation  $\sigma = 3$  hrs.

- (i) What sample size is needed in order to estimate  $\mu$  to within  $\pm 1$  hr with a probability of 0.95? (5 marks)

- (ii) A random sample of nine students is taken and their times spent in revision are recorded as follows :

21.4    19.7    10.7    20.6    20.8    20.1    19.7    20.3    20.9

Construct a 99% confidence interval for  $\mu$ . (8 marks)

**Question 4** (25 marks)

- (a) The proportion of low-income families in a certain city is believed to be  $p = 0.6$ . A random sample of 1000 families showed that 550 belongs to the low-income category. We want to test

$$H_0 : p = 0.6 \quad \text{against} \quad H_1 : p < 0.6.$$

- (i) Compute the  $P$ -value of the test. (6 marks)
- (ii) Based on the  $P$ -value explain, without further calculations, whether  $H_0$  should be rejected or not if the significance level is 1%. (2 marks)
- (iii) Calculate the probability of committing a Type-II error at the 1% level of significance, if the true proportion is  $p = 0.5$ . (8 marks)
- (b) In a study of differences in satisfaction level of male and female employees on the question of pay, the following table is obtained :

	Satisfaction with pay		
	Low	Medium	High
Male	13	18	32
Female	10	12	6

Test the null hypothesis of no association between sex and satisfaction level with pay at the 5% level. (9 marks)

- END -

Formula Sheet

$$Z = \frac{\bar{X} - \mu}{\sigma/\sqrt{n}}$$

$$T = \frac{\bar{X} - \mu}{S/\sqrt{n}}$$

$$Z = \frac{\hat{p} - p}{\sqrt{p(1-p)/n}}$$

$$a = \bar{y} - b\bar{x}$$

$$b = r \frac{S_y}{S_x}$$

$$T = \frac{b}{S_b}, \text{ where } S_b^2 = \frac{S_e^2}{\Sigma(x_i - \bar{x})^2}$$

$$S_e^2 = \frac{\Sigma y_i^2 - a\Sigma y_i - b\Sigma x_i y_i}{n-2}$$

$$T = r \sqrt{\frac{n-2}{1-r^2}}$$

$$r = \frac{1}{n-1} \Sigma \left( \frac{x_i - \bar{x}}{S_x} \right) \left( \frac{y_i - \bar{y}}{S_y} \right)$$

## APPENDIX II

Table entry for  $z$  is the area under the standard normal curve left of  $z$ .

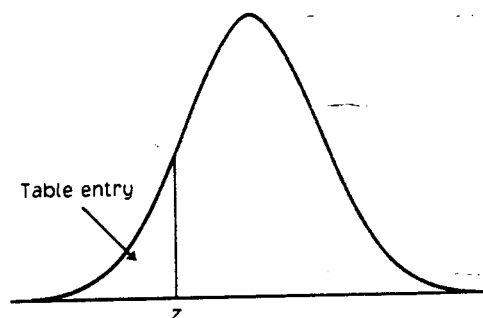


TABLE A Standard normal probabilities

$z$	.00	.01	.02	.03	.04	.05	.06	.07	.08	.09
-3.4	.0003	.0003	.0003	.0003	.0003	.0003	.0003	.0003	.0003	.0002
-3.3	.0005	.0005	.0005	.0004	.0004	.0004	.0004	.0004	.0004	.0003
-3.2	.0007	.0007	.0006	.0006	.0006	.0006	.0006	.0005	.0005	.0005
-3.1	.0010	.0009	.0009	.0009	.0008	.0008	.0008	.0008	.0007	.0007
-3.0	.0013	.0013	.0013	.0012	.0012	.0011	.0011	.0011	.0010	.0010
-2.9	.0019	.0018	.0018	.0017	.0016	.0016	.0015	.0015	.0014	.0014
-2.8	.0026	.0025	.0024	.0023	.0023	.0022	.0021	.0021	.0020	.0019
-2.7	.0035	.0034	.0033	.0032	.0031	.0030	.0029	.0028	.0027	.0026
-2.6	.0047	.0045	.0044	.0043	.0041	.0040	.0039	.0038	.0037	.0036
-2.5	.0062	.0060	.0059	.0057	.0055	.0054	.0052	.0051	.0049	.0048
-2.4	.0082	.0080	.0078	.0075	.0073	.0071	.0069	.0068	.0066	.0064
-2.3	.0107	.0104	.0102	.0099	.0096	.0094	.0091	.0089	.0087	.0084
-2.2	.0139	.0136	.0132	.0129	.0125	.0122	.0119	.0116	.0113	.0110
-2.1	.0179	.0174	.0170	.0166	.0162	.0158	.0154	.0150	.0146	.0143
-2.0	.0228	.0222	.0217	.0212	.0207	.0202	.0197	.0192	.0188	.0183
-1.9	.0287	.0281	.0274	.0268	.0262	.0256	.0250	.0244	.0239	.0233
-1.8	.0359	.0351	.0344	.0336	.0329	.0322	.0314	.0307	.0301	.0294
-1.7	.0446	.0436	.0427	.0418	.0409	.0401	.0392	.0384	.0375	.0367
-1.6	.0548	.0537	.0526	.0516	.0505	.0495	.0485	.0475	.0465	.0455
-1.5	.0668	.0655	.0643	.0630	.0618	.0606	.0594	.0582	.0571	.0559
-1.4	.0808	.0793	.0778	.0764	.0749	.0735	.0721	.0708	.0694	.0681
-1.3	.0968	.0951	.0934	.0918	.0901	.0885	.0869	.0853	.0838	.0823
-1.2	.1151	.1131	.1112	.1093	.1075	.1056	.1038	.1020	.1003	.0985
-1.1	.1357	.1335	.1314	.1292	.1271	.1251	.1230	.1210	.1190	.1170
-1.0	.1587	.1562	.1539	.1515	.1492	.1469	.1446	.1423	.1401	.1379
-0.9	.1841	.1814	.1788	.1762	.1736	.1711	.1685	.1660	.1635	.1611
-0.8	.2119	.2090	.2061	.2033	.2005	.1977	.1949	.1922	.1894	.1867
-0.7	.2420	.2389	.2358	.2327	.2296	.2266	.2236	.2206	.2177	.2148
-0.6	.2743	.2709	.2676	.2643	.2611	.2578	.2546	.2514	.2483	.2451
-0.5	.3085	.3050	.3015	.2981	.2946	.2912	.2877	.2843	.2810	.2776
-0.4	.3446	.3409	.3372	.3336	.3300	.3264	.3228	.3192	.3156	.3121
-0.3	.3821	.3783	.3745	.3707	.3669	.3632	.3594	.3557	.3520	.3483
-0.2	.4207	.4168	.4129	.4090	.4052	.4013	.3974	.3936	.3897	.3859
-0.1	.4602	.4562	.4522	.4483	.4443	.4404	.4364	.4325	.4286	.4247
-0.0	.5000	.4960	.4920	.4880	.4840	.4801	.4761	.4721	.4681	.4641





APPENDIX III

Table entry for  $p$  and  $C$  is the critical value  $t^*$  with probability  $p$  lying to its right and probability  $C$  lying between  $-t^*$  and  $t^*$ .

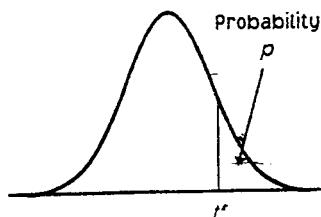


TABLE C  $t$  distribution critical values

df	Upper tail probability $p$											
	.25	.20	.15	.10	.05	.025	.02	.01	.005	.0025	.001	.0005
1	1.000	1.376	1.963	3.078	6.314	12.71	15.89	31.82	63.66	127.3	318.3	636.6
2	0.816	1.061	1.386	1.886	2.920	4.303	4.849	6.965	9.925	14.09	22.33	31.60
3	0.765	0.978	1.250	1.638	2.353	3.182	3.482	4.541	5.841	7.453	10.21	12.92
4	0.741	0.941	1.190	1.533	2.132	2.776	2.999	3.747	4.604	5.598	7.173	8.610
5	0.727	0.920	1.156	1.476	2.015	2.571	2.757	3.365	4.032	4.773	5.893	6.869
6	0.718	0.906	1.134	1.440	1.943	2.447	2.612	3.143	3.707	4.317	5.208	5.959
7	0.711	0.896	1.119	1.415	1.895	2.365	2.517	2.998	3.499	4.029	4.785	5.408
8	0.706	0.889	1.108	1.397	1.860	2.306	2.449	2.896	3.355	3.833	4.501	5.041
9	0.703	0.883	1.100	1.383	1.833	2.262	2.398	2.821	3.250	3.690	4.297	4.781
10	0.700	0.879	1.093	1.372	1.812	2.228	2.359	2.764	3.169	3.581	4.144	4.587
11	0.697	0.876	1.088	1.363	1.796	2.201	2.328	2.718	3.106	3.497	4.025	4.437
12	0.695	0.873	1.083	1.356	1.782	2.179	2.303	2.681	3.055	3.429	3.930	4.318
13	0.694	0.870	1.079	1.350	1.771	2.160	2.282	2.650	3.012	3.372	3.852	4.221
14	0.692	0.868	1.076	1.345	1.761	2.145	2.264	2.624	2.977	3.326	3.787	4.140
15	0.691	0.866	1.074	1.341	1.753	2.131	2.249	2.602	2.947	3.286	3.733	4.073
16	0.690	0.865	1.071	1.337	1.746	2.120	2.235	2.583	2.921	3.252	3.686	4.015
17	0.689	0.863	1.069	1.333	1.740	2.110	2.224	2.567	2.898	3.222	3.646	3.965
18	0.688	0.862	1.067	1.330	1.734	2.101	2.214	2.552	2.878	3.197	3.611	3.922
19	0.688	0.861	1.066	1.328	1.729	2.093	2.205	2.539	2.861	3.174	3.579	3.883
20	0.687	0.860	1.064	1.325	1.725	2.086	2.197	2.528	2.845	3.153	3.552	3.850
21	0.686	0.859	1.063	1.323	1.721	2.080	2.189	2.518	2.831	3.135	3.527	3.819
22	0.686	0.858	1.061	1.321	1.717	2.074	2.183	2.508	2.819	3.119	3.505	3.792
23	0.685	0.858	1.060	1.319	1.714	2.069	2.177	2.500	2.807	3.104	3.485	3.768
24	0.685	0.857	1.059	1.318	1.711	2.064	2.172	2.492	2.797	3.091	3.467	3.745
25	0.684	0.856	1.058	1.316	1.708	2.060	2.167	2.485	2.787	3.078	3.450	3.725
26	0.684	0.856	1.058	1.315	1.706	2.056	2.162	2.479	2.779	3.067	3.435	3.707
27	0.684	0.855	1.057	1.314	1.703	2.052	2.158	2.473	2.771	3.057	3.421	3.690
28	0.683	0.855	1.056	1.313	1.701	2.048	2.154	2.467	2.763	3.047	3.408	3.674
29	0.683	0.854	1.055	1.311	1.699	2.045	2.150	2.462	2.756	3.038	3.396	3.659
30	0.683	0.854	1.055	1.310	1.697	2.042	2.147	2.457	2.750	3.030	3.385	3.646
40	0.681	0.851	1.050	1.303	1.684	2.021	2.123	2.423	2.704	2.971	3.307	3.551
50	0.679	0.849	1.047	1.299	1.676	2.009	2.109	2.403	2.678	2.937	3.261	3.496
60	0.679	0.848	1.045	1.296	1.671	2.000	2.099	2.390	2.660	2.915	3.232	3.460
80	0.678	0.846	1.043	1.292	1.664	1.990	2.088	2.374	2.639	2.887	3.195	3.416
100	0.677	0.845	1.042	1.290	1.660	1.984	2.081	2.364	2.626	2.871	3.174	3.390
1000	0.675	0.842	1.037	1.282	1.646	1.962	2.056	2.330	2.581	2.813	3.098	3.300
$z^*$	0.674	0.841	1.036	1.282	1.645	1.960	2.054	2.326	2.576	2.807	3.091	3.291
	50%	60%	70%	80%	90%	95%	96%	98%	99%	99.5%	99.8%	99.9%
	Confidence level $C$											

Table entry for  $p$  is the critical value  $x^*$  with probability  $p$  lying to its right.

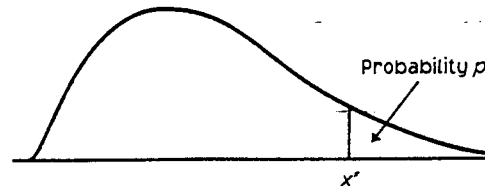


TABLE E Chi-square distribution critical values

df	$\alpha$											
	.25	.20	.15	.10	.05	.025	.02	.01	.005	.0025	.001	.0005
1	1.32	1.64	2.07	2.71	3.84	5.02	5.41	6.63	7.88	9.14	10.83	12.11
2	2.77	3.22	3.79	4.61	5.99	7.38	7.82	9.21	10.60	11.98	13.82	15.20
3	4.11	4.64	5.32	6.25	7.81	9.35	9.84	11.34	12.84	14.32	16.27	17.73
4	5.39	5.99	6.74	7.78	9.49	11.14	11.67	13.28	14.86	16.42	18.47	20.00
5	6.63	7.29	8.12	9.24	11.07	12.83	13.39	15.09	16.75	18.39	20.51	22.11
6	7.84	8.56	9.45	10.64	12.59	14.45	15.03	16.81	18.55	20.25	22.46	24.10
7	9.04	9.80	10.75	12.02	14.07	16.01	16.62	18.48	20.28	22.04	24.32	26.02
8	10.22	11.03	12.03	13.36	15.51	17.53	18.17	20.09	21.95	23.77	26.12	27.87
9	11.39	12.24	13.29	14.68	16.92	19.02	19.68	21.67	23.59	25.46	27.88	29.67
10	12.55	13.44	14.53	15.99	18.31	20.48	21.16	23.21	25.19	27.11	29.59	31.42
11	13.70	14.63	15.77	17.28	19.68	21.92	22.62	24.72	26.76	28.73	31.26	33.11
12	14.85	15.81	16.99	18.55	21.03	23.34	24.05	26.22	28.30	30.32	32.91	34.82
13	15.98	16.98	18.20	19.81	22.36	24.74	25.47	27.69	29.82	31.88	34.53	36.48
14	17.12	18.15	19.41	21.06	23.68	26.12	26.87	29.14	31.32	33.43	36.12	38.11
15	18.25	19.31	20.60	22.31	25.00	27.49	28.26	30.58	32.80	34.95	37.70	39.72
16	19.37	20.47	21.79	23.54	26.30	28.85	29.63	32.00	34.27	36.46	39.25	41.31
17	20.49	21.61	22.98	24.77	27.59	30.19	31.00	33.41	35.72	37.95	40.79	42.88
18	21.60	22.76	24.16	25.99	28.87	31.53	32.35	34.81	37.16	39.42	42.31	44.43
19	22.72	23.90	25.33	27.20	30.14	32.85	33.69	36.19	38.58	40.88	43.82	45.97
20	23.83	25.04	26.50	28.41	31.41	34.17	35.02	37.57	40.00	42.34	45.31	47.50
21	24.93	26.17	27.66	29.62	32.67	35.48	36.34	38.93	41.40	43.78	46.80	49.01
22	26.04	27.30	28.82	30.81	33.92	36.78	37.66	40.29	42.80	45.20	48.27	50.51
23	27.14	28.43	29.98	32.01	35.17	38.08	38.97	41.64	44.18	46.62	49.73	52.00
24	28.24	29.55	31.13	33.20	36.42	39.36	40.27	42.98	45.56	48.03	51.18	53.48
25	29.34	30.68	32.28	34.38	37.65	40.65	41.57	44.31	46.93	49.44	52.62	54.95
26	30.43	31.79	33.43	35.56	38.89	41.92	42.86	45.64	48.29	50.83	54.05	56.41
27	31.53	32.91	34.57	36.74	40.11	43.19	44.14	46.96	49.64	52.22	55.48	57.86
28	32.62	34.03	35.71	37.92	41.34	44.46	45.42	48.28	50.99	53.59	56.89	59.30
29	33.71	35.14	36.85	39.09	42.56	45.72	46.69	49.59	52.34	54.97	58.30	60.73
30	34.80	36.25	37.99	40.26	43.77	46.98	47.96	50.89	53.67	56.33	59.70	62.16
40	45.62	47.27	49.24	51.81	55.76	59.34	60.44	63.69	66.77	69.70	73.40	76.29
50	56.33	58.16	60.35	63.17	67.50	71.42	72.61	76.15	79.49	82.66	86.66	89.56
60	66.98	68.97	71.34	74.40	79.08	83.30	84.58	88.38	91.95	95.34	99.61	102.7
80	88.13	90.41	93.11	96.58	101.9	106.6	108.1	112.3	116.3	120.1	124.8	128.3
100	109.1	111.7	114.7	118.5	124.3	129.6	131.1	135.8	140.2	144.3	149.4	153.2