

Show all work on a separate sheet of paper.

1. Graph each parabola. Identify the critical features (vertex, focus and equation for the directrix):

a) $y - 3 = \frac{1}{4}(x + 2)^2$

b) $x = -\frac{1}{8}(y - 2)^2 - 5$

c) $16y - 32 = x^2$

2. Graph each circle. Identify the coordinates of the center.

a) $(x - 3)^2 + (y + 6)^2 = 4$

b) $x^2 + (y - 1)^2 = 16$

c) $(x - 7)^2 + (y - 5)^2 = 81$

3. Graph each ellipse. Identify the coordinates of the center, the vertices and the foci.

a) $\frac{(x - 1)^2}{4} + \frac{(y + 6)^2}{9} = 1$

b) $\frac{(x + 2)^2}{16} + \frac{(y - 3)^2}{1} = 1$

c) $\frac{(y - 3)^2}{81} + \frac{(x - 5)^2}{36} = 1$

4. Graph each hyperbola. Identify the coordinates of the center, vertices and foci.

a) $\frac{(x - 3)^2}{4} - \frac{(y - 4)^2}{4} = 1$

b) $\frac{(y + 2)^2}{9} - \frac{(x - 1)^2}{16} = 1$

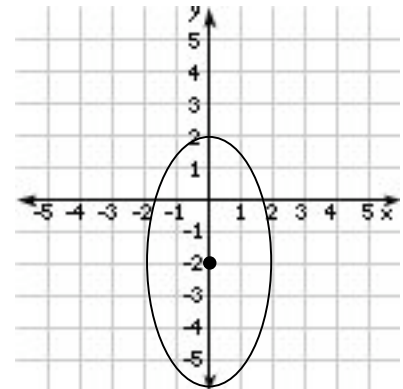
5. Complete the square to get each conic so that it is in standard form. Identify its shape (circle, ellipse, hyperbola or parabola)

a) $x^2 + y^2 - 4x + 10y = -20$

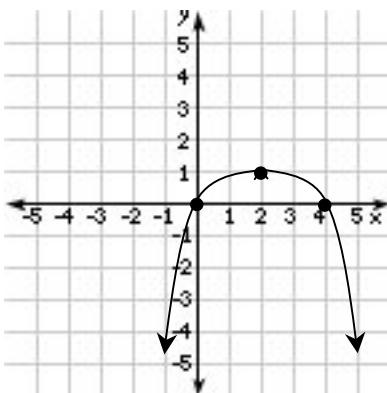
b) $x^2 - 8x + 4y^2 - 16y = -28$

c) $x^2 - 6x - 4y + 5 = 0$

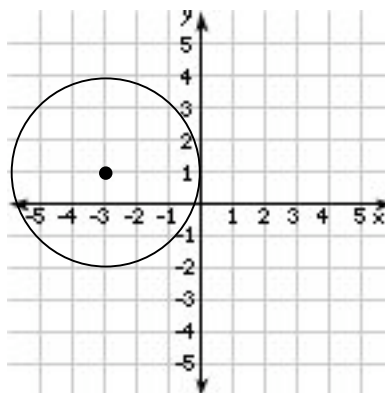
6. Write the equation in standard form for the conic shown below:



7. Write the equation in standard form for the conic shown below:



8. Write the equation in standard form for the conic shown below:



9. Write the equation in standard form for the conic shown below:

